

Mathematik Klasse 1a

Aufgaben für die Lernzeit

11.05.2020 bis 15.05.2020

K. Kaline

Montag, 11.05.2020

OUPS®



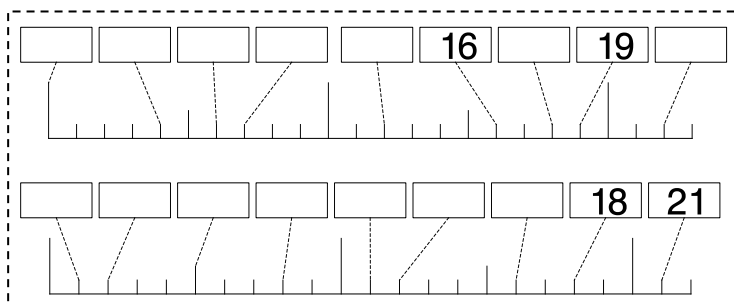
Schreibe die Übung in dein M1 ab.

Übung

1. $10 + 8 =$ $13 + \underline{\quad} = 20$
 $10 + 4 =$ $16 + \underline{\quad} = 20$
 $10 + 9 =$ $11 + \underline{\quad} = 20$
 $10 + 2 =$ $18 + \underline{\quad} = 20$
 $10 + 7 =$ $15 + \underline{\quad} = 20$

2. $15 - 5 - 9 =$ $13 - 9 =$
 $18 - 8 - 2 =$ $16 - 4 =$
 $13 - 3 - 7 =$ $11 - 3 =$
 $19 - 9 - 4 =$ $15 - 8 =$
 $16 - 6 - 6 =$ $12 - 7 =$

3. Welche Zahlen fehlen?



Fleiß: Arbeitsblatt

Dienstag, 12.05.2020

Schreibe die Übung in dein M1 ab.

Übung

1.

+	10	6	3	9	
3					
9					14
5					

6 cm lang

5 Striche

2. Zeichne Geraden

m = 2 cm 4 mm (2,4 cm)


r = 7 cm 5 mm (7,5 cm)

d = 1 cm 2 mm (1,2 cm)

n = 9 cm 8 mm (9,8 cm)

z = 4 cm 1 mm (4,1 cm)

l = 8 cm 7 mm (8,7 cm)



Welches Zeichen steht für welche Zahl?

+ 4 = 7	13 - = 6	+ 4 = 18	+ 13 = 15
12 - =	- 6 =	+ = 20	- = 8
3 9			

13 - = 8	19 - = 2	+ = 18	+ = 16
- 6 =	+ 3 =	13 - =	- =



Ein Miteinander
macht das Leben lebenswert,
ein Füreinander
macht es liebenswert.

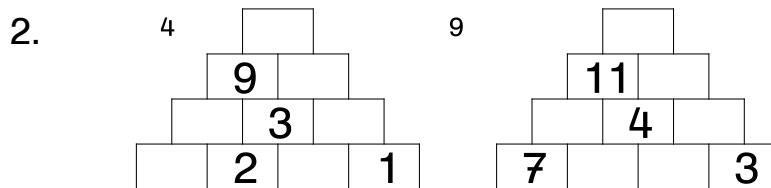
OUPS

Mittwoch, 13.05.2020

Schreibe die Übung in dein M1 ab.

Übung

- | | | |
|----|------------|------------|
| 1. | $12 - 6 =$ | $15 - 6 =$ |
| | $8 - 4 =$ | $20 - 3 =$ |
| | $16 - 8 =$ | $11 - 8 =$ |
| | $10 - 5 =$ | $16 - 4 =$ |
| | $18 - 9 =$ | $13 - 9 =$ |




Geometrie: Fische falten



Gestalte ein A4-Blatt mit 4 bis 6 kleinen Fischen in einer Unterwasserwelt.




Donnerstag, 14.05.2020



1 $12 - 4 = \underline{\quad}$
 $11 - 10 = \underline{\quad}$
 $9 + 5 = \underline{\quad}$
 $13 + 6 = \underline{\quad}$

2 $13 - 6 = \underline{\quad}$
 $7 + 8 = \underline{\quad}$
 $20 - 8 = \underline{\quad}$
 $11 - 7 = \underline{\quad}$

3 $11 + 5 = \underline{\quad}$
 $12 - 6 = \underline{\quad}$
 $13 - 8 = \underline{\quad}$
 $9 + 9 = \underline{\quad}$
 $10 - 6 = \underline{\quad}$




4 $5 + 6 = \underline{\quad}$
 $19 + 2 = \underline{\quad}$
 $13 - 5 = \underline{\quad}$

5 $15 + 4 = \underline{\quad}$
 $10 - 7 = \underline{\quad}$
 $12 - 4 = \underline{\quad}$
 $20 + 3 = \underline{\quad}$
 $11 - 6 = \underline{\quad}$
 $16 - 7 = \underline{\quad}$
 $6 + 8 = \underline{\quad}$



6 $14 - 7 = \underline{\quad}$
 $9 - 8 = \underline{\quad}$
 $9 + 5 = \underline{\quad}$
 $12 + 7 = \underline{\quad}$



7 $20 - 1 = \underline{\quad}$
 $12 + 8 = \underline{\quad}$
 $12 - 7 = \underline{\quad}$
 $11 - 2 = \underline{\quad}$
 $20 - 6 = \underline{\quad}$
 $5 + 0 = \underline{\quad}$

8 $7 + 6 = \underline{\quad}$
 $18 + 3 = \underline{\quad}$
 $11 + 9 = \underline{\quad}$
 $20 - 0 = \underline{\quad}$
 $9 - 4 = \underline{\quad}$
 $13 + 5 = \underline{\quad}$



1	2	3	4	5	6	7	8	9	10	11	12	13	14	15	16	17	18	19	20	21	22	23	24	25	26
A	B	C	D	E	F	G	H	I	J	K	L	M	N	O	P	Q	R	S	T	U	V	W	X	Y	Z

Freitag, 15.05.2020

Schreibe die Übung in dein M1 ab.

Übung

1. $7 + 9 =$

$3 + 8 =$

$6 + 4 =$

$5 + 9 =$

$8 + 7 =$

$6 + 5 =$

$4 + 9 =$

$8 + 8 =$

$3 + 6 =$

$9 + 8 =$

2. $12 - 8 =$

$16 - 5 =$

$13 - 9 =$

$18 - 2 =$

$11 - 5 =$

$20 - 6 =$

$15 - 4 =$

$11 - 8 =$

$19 - 3 =$

$14 - 5 =$



$300 + 400 =$

$700 + 200 =$

$500 + 500 =$

$100 + 600 =$

$400 + 400 =$


$1000 - 800 =$

$600 - 900 =$

$900 - 200 =$

$500 - 400 =$

$800 - 500 =$



Fleiß:

- Arbeitsblätter

- B. S. 105, Nr. 5

- B. S. 105, Nr. 6

- B. S. 105, Nr. 7




... die kleinen Freuden auf unserem Weg dankbar anzunehmen.



Übungen zum Addieren und Subtrahieren – 1

1



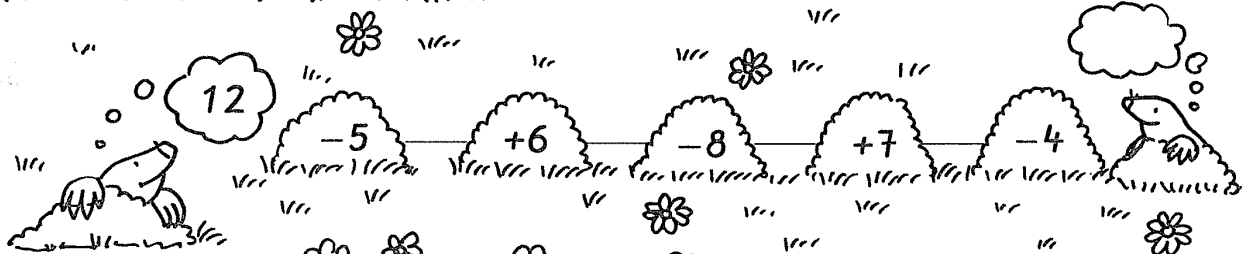
2

+	4	7	5
6			
9			

+	5	8	6
6			
8			

+	4	7	9
5			
7			

3



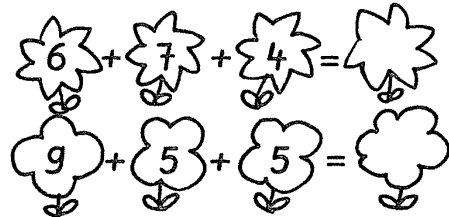

4

-	6	8	4
15			
12			

-	9	6	8
16			
17			

-	7	5	9
11			
14			

5



6

+6	
5	
7	
9	
6	

+7	
	13
	17
	14
	11




-8	
13	
15	
17	
14	

-5	
	16
	14
	11
	18






Windmühlen – 1

1



2



3

